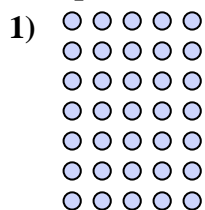
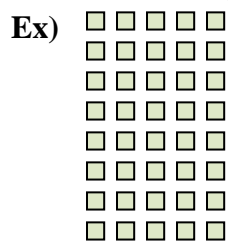




Write each array as a multiplication problem and solve.



Answers

Ex. 8 × 5 = 40

1. _____

2. _____

3. _____

4. _____

5. _____

6. _____

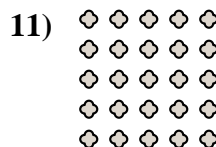





7. _____

8. _____

9. _____

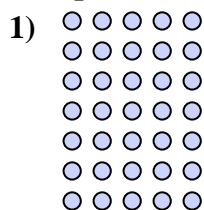
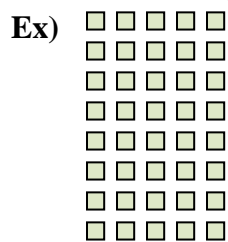
10. _____

11. _____





Write each array as a multiplication problem and solve.



Answers

Ex. $8 \times 5 = 40$

1. $7 \times 5 = 35$

2. $4 \times 3 = 12$

3. $8 \times 10 = 80$

4. $6 \times 4 = 24$

5. $9 \times 3 = 27$

6. $7 \times 7 = 49$

7. $10 \times 9 = 90$

8. $4 \times 8 = 32$

9. $7 \times 9 = 63$

10. $7 \times 2 = 14$

11. $5 \times 5 = 25$

